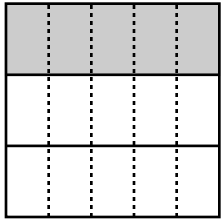


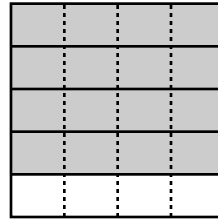
Name \_\_\_\_\_

Date \_\_\_\_\_

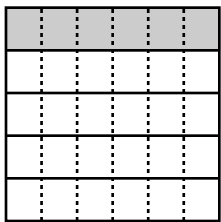
Reduce each fraction to lowest terms.



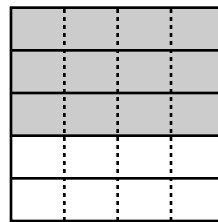
$$\frac{5}{15} = \underline{\hspace{2cm}}$$



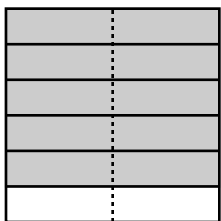
$$\frac{16}{20} = \underline{\hspace{2cm}}$$



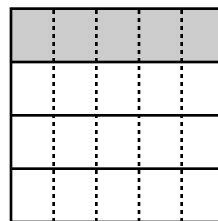
$$\frac{6}{30} = \underline{\hspace{2cm}}$$



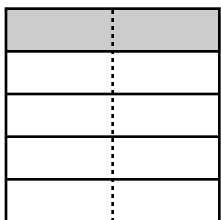
$$\frac{12}{20} = \underline{\hspace{2cm}}$$



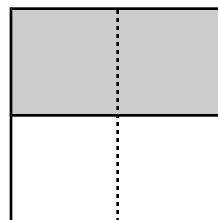
$$\frac{10}{12} = \underline{\hspace{2cm}}$$



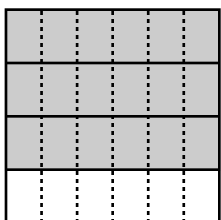
$$\frac{5}{20} = \underline{\hspace{2cm}}$$



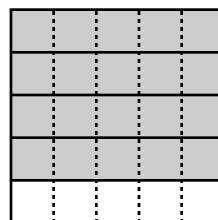
$$\frac{2}{10} = \underline{\hspace{2cm}}$$



$$\frac{2}{4} = \underline{\hspace{2cm}}$$



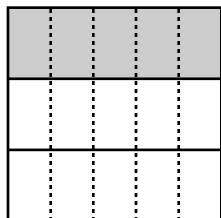
$$\frac{18}{24} = \underline{\hspace{2cm}}$$



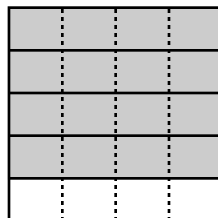
$$\frac{20}{25} = \underline{\hspace{2cm}}$$

# Answer Key

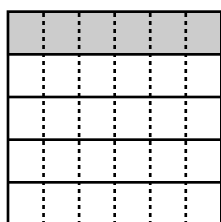
Reduce each fraction to lowest terms.



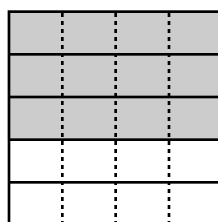
$$\frac{5}{15} = \underline{\frac{1}{3}}$$



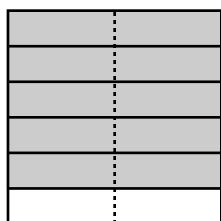
$$\frac{16}{20} = \underline{\frac{4}{5}}$$



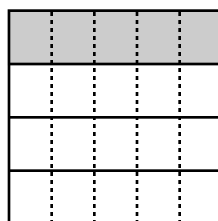
$$\frac{6}{30} = \underline{\frac{1}{5}}$$




$$\frac{12}{20} = \underline{\frac{3}{5}}$$



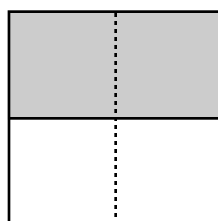
$$\frac{10}{12} = \underline{\frac{5}{6}}$$



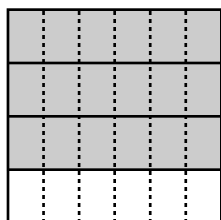
$$\frac{5}{20} = \underline{\frac{1}{4}}$$



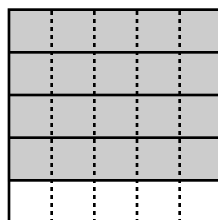
$$\frac{2}{10} = \underline{\frac{1}{5}}$$



$$\frac{2}{4} = \underline{\frac{1}{2}}$$



$$\frac{18}{24} = \underline{\frac{3}{4}}$$



$$\frac{20}{25} = \underline{\frac{4}{5}}$$